

Name: _____

Score: _____

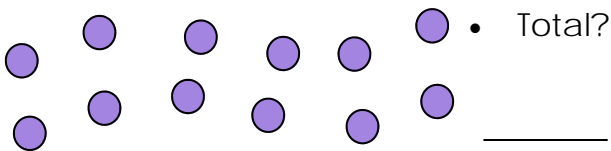
Morning Math

Today is: _____

Write the numbers from 551 to 560. Color the number that is five more than 553 green.

○ ○ ○ ○ ○ ○ ○ ○ ○ ○

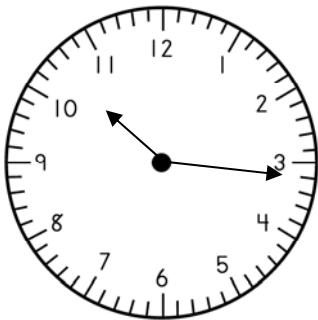
- Count the total number of circles.



- Circle groups of 3.
- How many groups of 3 did you circle? _____

- There are 72 horses.
- There are 48 pigs.
- There are 64 cows.
- How many animals are on the farm altogether?
- Circle the clue words.
- Write and solve this problem.

What is the time?



- Mark the number that has a 3 in the tens' place.

923 239 392

- Mark the number that has a 9 in the hundreds' place.

923 239 392

$$\begin{array}{r} 227 \\ + 467 \\ \hline \end{array} \quad \begin{array}{r} 48 \\ + 92 \\ \hline \end{array}$$

$$\begin{array}{r} 5 \\ \times 2 \\ \hline \end{array} \quad \begin{array}{r} 3 \\ \times 2 \\ \hline \end{array}$$

$$\begin{array}{r} 11 \\ - 7 \\ \hline \end{array} \quad \begin{array}{r} 64 \\ - 35 \\ \hline \end{array}$$

Name: _____

Score: _____

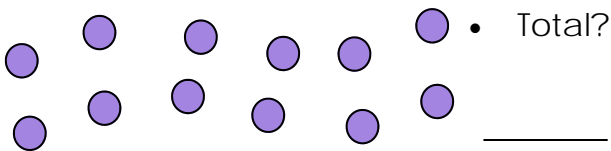
Math Homework

Today is: _____

Write the numbers from 551 to 560. Color the number that is seven less than 559 green.

○ ○ ○ ○ ○ ○ ○ ○ ○ ○

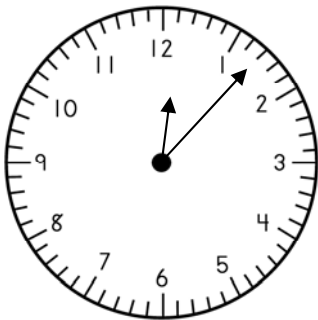
- Count the total number of circles.



- Circle groups of 2.
- How many groups of 2 did you circle? _____

- There are 86 horses.
- There are 52 pigs.
- There are 99 cows.
- How many animals are on the farm altogether?
- Circle the clue words.
- Write and solve this problem.

What is the time?



- Mark the number that has an 8 in the ones' place.

578 785 857

- Mark the number that has a 7 in the hundreds' place.

578 785 857

$$\begin{array}{r} 634 \\ + 198 \\ \hline \end{array} \quad \begin{array}{r} 55 \\ + 75 \\ \hline \end{array}$$

$$\begin{array}{r} 4 \\ \times 2 \\ \hline \end{array} \quad \begin{array}{r} 5 \\ \times 2 \\ \hline \end{array}$$

$$\begin{array}{r} 13 \\ - 9 \\ \hline \end{array} \quad \begin{array}{r} 80 \\ - 66 \\ \hline \end{array}$$