

Name: _____

Score: _____

Morning Math

Today is: _____

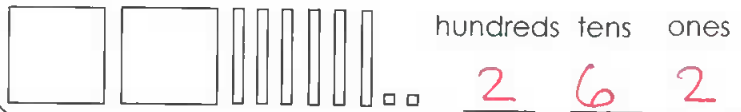
Count by 10's. Color the number that is ten more than 60 blue.



- Jill counted 26 ducks, 29 flamingos, and 35 peacocks at the zoo.
- How many birds did Jill count in all?
- Circle the clue words.
- Write and solve this problem.

$$\begin{array}{r} 26 \\ 29 \\ + 35 \\ \hline 90 \end{array}$$

- Count the hundreds.
- Count the tens.
- Count the ones.



What number is in the ones' place?

326 6

What number is in the hundreds' place?

752 7



- How much?

\$1.06

$$\begin{array}{r} 7 \\ + 7 \\ \hline 14 \end{array}$$

$$\begin{array}{r} 6 \\ + 4 \\ \hline 10 \end{array}$$

$$\begin{array}{r} 38 \\ + 55 \\ \hline 93 \end{array}$$

$$\begin{array}{r} 7 \\ - 2 \\ \hline 5 \end{array}$$

$$\begin{array}{r} 9 \\ - 3 \\ \hline 6 \end{array}$$

$$\begin{array}{r} 45 \\ - 28 \\ \hline 17 \end{array}$$

Name: _____

Score: _____

Math Homework

Today is: _____

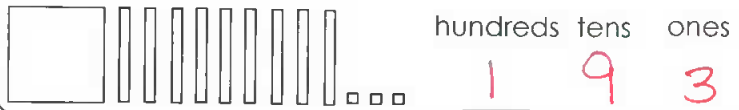
Count by 10's. Color the number that is ten less than 40 blue.



- Ted counted 26 blackbirds, 43 bluebirds, and 28 finches. How many birds did Ted count altogether?
- Circle the clue words.
- Write and solve this problem.

$$\begin{array}{r} 26 \\ 43 \\ + 28 \\ \hline 97 \end{array}$$

- Count the hundreds.
- Count the tens.
- Count the ones.



What number is in the hundreds' place?

174 1

What number is in the tens' place?

630 3



- How much?

\$1.02

$\begin{array}{r} 5 \\ + 3 \\ \hline 8 \end{array}$	$\begin{array}{r} 7 \\ + 6 \\ \hline 13 \end{array}$	$\begin{array}{r} 25 \\ + 35 \\ \hline 60 \end{array}$
---	--	--

$\begin{array}{r} 8 \\ - 4 \\ \hline 4 \end{array}$	$\begin{array}{r} 6 \\ - 2 \\ \hline 4 \end{array}$	$\begin{array}{r} 56 \\ - 38 \\ \hline 18 \end{array}$
---	---	--

Name: _____

Score: _____

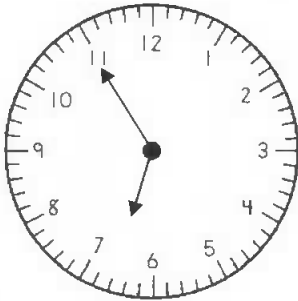
Morning Math

Today is: _____

Write the numbers from 491 to 500. Color the number that is six more than 493 blue.

491	492	493	494	495	496	497	498	499	500
-----	-----	-----	-----	-----	-----	-----	-----	-----	-----

What is the time?



6:55



• How much?

91¢

Mark the number that has a 3 in the hundreds' place.

143

431

314

Please answer each question.

- How many cartons of milk did Maria drink?

20

- Who drank the least cartons of milk?

Kip

Cartons of Milk Consumed

Joe	■	■	■	■	■	■	■	■		
Maria	■	■	■	■	■	■	■	■	■	■
Kip	■	■	■	■	■					

• ■ = 2 cartons of milk

$$\begin{array}{r} 57 \\ + 33 \\ \hline 90 \end{array} \quad 3 + 5 = \underline{8}$$

$$\begin{array}{r} 9 \\ - 6 \\ \hline 3 \end{array} \quad 14 - 9 = \underline{5}$$

Name: _____

Score: _____

Math Homework

Today is: _____

Write the numbers from 491 to 500. Color the number that is 8 less than 500 green.

491 492 493 494 495 496 497 498 499 500

What is the time?



10:00



• How much?

80¢

Mark the number that has a 4 in the tens' place.

143

431

314

Please answer each question.

- How many cartons of milk did Kip drink?

16

- Did Joe or Kip drink the most cartons of milk?

Joe

Cartons of Milk Consumed

Joe										
Maria										
Kip										

• = 2 cartons of milk

$$\begin{array}{r} 42 \\ + 29 \\ \hline 71 \end{array}$$

$$4 + 6 = 10$$

$$\begin{array}{r} 7 \\ - 5 \\ \hline 2 \end{array}$$

$$12 - 6 = 6$$

Name: _____

Score: _____

Morning Math

Today is: _____

Continue counting. Color the number that is 3 less than 432 orange.



- There are 29 students playing games on the playground.
- 16 more students are on the swings and slides.
- 19 students are sitting on benches.
- How many children are on the playground in all?
- Write and solve this problem.

$$\begin{array}{r} 29 \\ 16 \\ + 19 \\ \hline 64 \end{array}$$

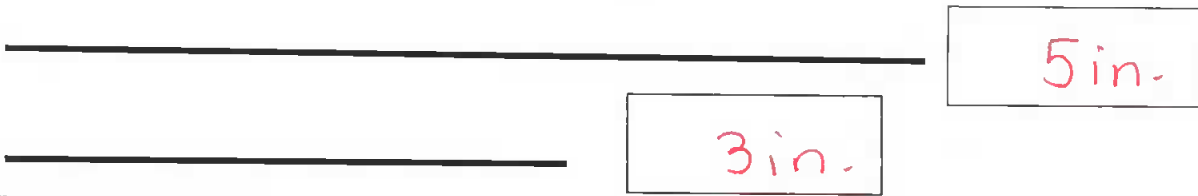
Use >, <, or =

$$6 + 9 \text{ } > \text{ } 5 + 8$$

Find the missing number.

$$30 - \boxed{19} = 11$$

Please measure each line to the nearest inch.



$$4 + 4 + 4 + 4 = \underline{16}$$

$$5 + 5 + 5 = \underline{15}$$

$$\begin{array}{r} 17 \\ - 9 \\ \hline 8 \end{array} \quad \begin{array}{r} 50 \\ - 33 \\ \hline 17 \end{array}$$

Name: _____

Score: _____

Math Homework

Today is: _____

Continue counting. Color the number that is 5 more than 419 orange.

417 418 419 420 421 422 423 424 425 426

- There are 35 students playing games on the playground.
- 15 more students are on the swings and slides.
- 22 students are sitting on benches.
- How many children are on the playground in all?
- Write and solve this problem.

$$\begin{array}{r} 35 \\ 15 \\ + 22 \\ \hline 72 \end{array}$$

Use $>$, $<$, or $=$

$$8 + 4 \text{ (with 12 above 8)} = 9 + 3 \text{ (with 12 above 9)}$$

Find the missing number.

$$35 - \boxed{19} = 16$$

Please measure each line to the nearest inch.

_____ 2 in.

_____ 3 in.

$$7 + 7 + 7 + 7 = \underline{28}$$

$$6 + 6 + 6 = \underline{18}$$

$$\begin{array}{r} 14 \\ - 6 \\ \hline 8 \end{array} \quad \begin{array}{r} 5 \\ 62 \\ - 45 \\ \hline 17 \end{array}$$

Name: _____

Score: _____


Morning Math

Today is: _____

Write the numbers from 501 to 510. Color the number that is 3 more than 505 blue.

501	502	503	504	505	506	507	508	509	510
-----	-----	-----	-----	-----	-----	-----	-----	-----	-----

There are 43 more chickens inside the barn.



$$\begin{array}{r} 43 \\ + 12 \\ \hline 55 \end{array}$$

How many chickens are there in all?

55

Find the missing numbers.

$$\boxed{29} + 23 = 52$$

$$\boxed{43} - 18 = 25$$

- Write the number that is 10 more than 230.

240

- Adam counted 46 books on the first shelf, 31 books on the second shelf, 29 books on the third shelf, and 33 books on the fourth shelf.
- How many books did Adam count altogether?
- Circle the clue words.
- Write and solve this problem.

$$\begin{array}{r} 46 \\ 31 \\ 29 \\ + 33 \\ \hline 139 \end{array}$$

$\begin{array}{r} 1 \\ 54 \\ + 27 \\ \hline 81 \end{array}$	$\begin{array}{r} 5 \\ + 5 \\ \hline 10 \end{array}$	$\begin{array}{r} 9 \\ + 4 \\ \hline 13 \end{array}$
---	--	--

$\begin{array}{r} 8 \\ - 3 \\ \hline 5 \end{array}$	$\begin{array}{r} 11 \\ - 8 \\ \hline 3 \end{array}$	$\begin{array}{r} 6 \\ 70 \\ - 56 \\ \hline 14 \end{array}$
---	--	---


Name: _____

Score: _____


Math Homework

Today is: _____

Write the numbers from 501 to 510. Color the number that is 6 less than 508 green.



There are 39 more chickens inside the barn.



How many chickens are there in all?

51

Find the missing numbers.

$$\boxed{25} + 36 = 61$$

$$\boxed{44} - 17 = 27$$

- Write the number that is 10 more than 260.

270

- Adam counted 56 books on the first shelf, 33 books on the second shelf, 27 books on the third shelf, and 35 books on the fourth shelf.
- How many books did Adam count altogether?
- Circle the clue words.
- Write and solve this problem.

$$\begin{array}{r} 56 \\ 33 \\ 27 \\ + 35 \\ \hline 151 \end{array}$$

$$\begin{array}{r} 61 \\ + 56 \\ \hline 117 \end{array}$$
$$\begin{array}{r} 8 \\ + 7 \\ \hline 15 \end{array}$$
$$\begin{array}{r} 3 \\ + 4 \\ \hline 7 \end{array}$$

$$\begin{array}{r} 4 \\ - 2 \\ \hline 2 \end{array}$$
$$\begin{array}{r} 13 \\ - 7 \\ \hline 6 \end{array}$$
$$\begin{array}{r} 55 \\ - 38 \\ \hline 17 \end{array}$$

Name: _____

Score: _____

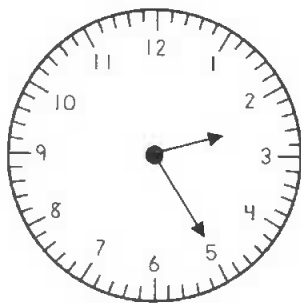
Morning Math Test

Today is: _____

Write the numbers from 511 to 520. Color the number that is 9 less than 520 blue.

511 512 513 514 515 516 517 518 519 520

What is the time?



2:25



• How much?

\$1.71

- The store sold 36 chocolate cones, 45 vanilla cones, and 29 strawberry cones.
- How many ice cream cones did the store sell in all?
- Circle the clue words.
- Write and solve the problem.

$$\begin{array}{r} 36 \\ 45 \\ + 29 \\ \hline 110 \end{array}$$

$$\begin{array}{r} 44 \\ + 56 \\ \hline 100 \end{array} \quad \begin{array}{r} 9 \\ + 6 \\ \hline 15 \end{array} \quad \begin{array}{r} 4 \\ + 8 \\ \hline 12 \end{array}$$

$$\begin{array}{r} 6 \\ - 3 \\ \hline 3 \end{array} \quad \begin{array}{r} 10 \\ - 7 \\ \hline 3 \end{array} \quad \begin{array}{r} 70 \\ - 47 \\ \hline 23 \end{array}$$

Name: _____

Score: _____

Math Homework

Today is: _____

Write the numbers from 511 to 520. Color the number that is 4 more than 512 blue.

511	512	513	514	515	516	517	518	519	520
-----	-----	-----	-----	-----	-----	-----	-----	-----	-----

What is the time?



11:50



• How much?

\$1.41

- The store sold 42 chocolate cones, 26 vanilla cones, and 45 strawberry cones.
- How many ice cream cones did the store sell in all?
- Circle the clue words.
- Write and solve the problem.

$$\begin{array}{r}
 42 \\
 26 \\
 + 45 \\
 \hline
 113
 \end{array}$$

$\begin{array}{r} 37 \\ + 44 \\ \hline 81 \end{array}$	$\begin{array}{r} 6 \\ + 6 \\ \hline 12 \end{array}$	$\begin{array}{r} 9 \\ + 2 \\ \hline 11 \end{array}$
--	--	--

$\begin{array}{r} 8 \\ - 6 \\ \hline 2 \end{array}$	$\begin{array}{r} 11 \\ - 5 \\ \hline 6 \end{array}$	$\begin{array}{r} 5 \\ 66 \\ - 38 \\ \hline 28 \end{array}$
---	--	---