

Name: _____

Score: _____

Morning Math

Today is: _____

How much?

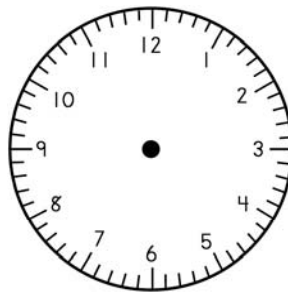
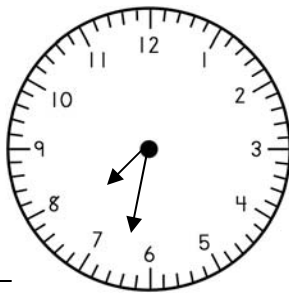


Write the number that is ten more than 95.

What is the time?

Show 3:45

- It is morning.



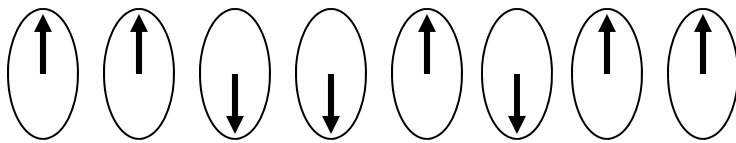
Round to nearest ten.

62 _____

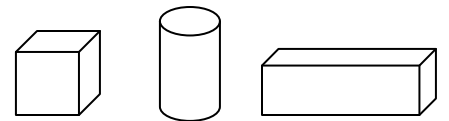
Please order these numbers from least to greatest:

753	709	745	712
-----	-----	-----	-----

- What comes next?



Circle the cylinder:



Please finish:

98, 88, 78, _____, _____, _____, _____, _____, _____

Solve:

$$\begin{array}{r} \$14.86 \\ + 24.13 \\ \hline \end{array}$$

$$\begin{array}{r} 38 \\ + 67 \\ \hline \end{array}$$

$$\begin{array}{r} 63 \\ - 21 \\ \hline \end{array}$$

$$\begin{array}{r} 886 \\ - 671 \\ \hline \end{array}$$

Name: _____

Score: _____

Homework Math

Today is: _____

How much?

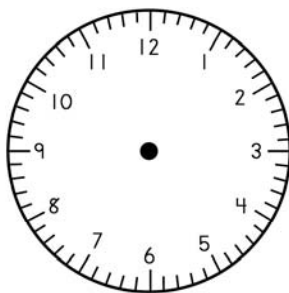
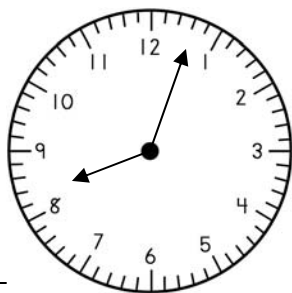


Write the number that is ten more than 185.

What is the time?

Show quarter of seven.

- It is night.



Round to nearest ten.

525 _____

Daryl had \$26.33. He earned \$12.25 cutting lawns. How much money does Daryl have in all? Please write and solve the problem.

Daryl has _____ in all.

Please order these numbers from least to greatest:

659	632	618	620
-----	-----	-----	-----

Please finish:

58, 62, 66, _____, _____, _____, _____, _____, _____, _____

Solve:

$$\begin{array}{r} \$ 25.62 \\ + 20.25 \\ \hline \end{array}$$

$$\begin{array}{r} 356 \\ + 420 \\ \hline \end{array}$$

$$\begin{array}{r} 45 \\ - 13 \\ \hline \end{array}$$

$$\begin{array}{r} 683 \\ - 453 \\ \hline \end{array}$$