

Name: _____

Score: _____

Morning Math

Today is: _____

How much?

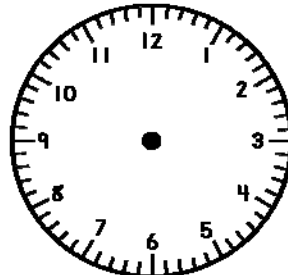
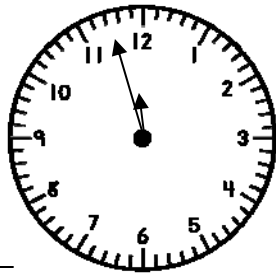


Write the number that is one hundred more than 2,908.

What is the time?

Show 6:09

- It is morning.



Round to nearest hundred.

2,347 _____

Please order these numbers from least to greatest:

7,728	7,035	7,376	7,534	7,157
-------	-------	-------	-------	-------

Please mark all numbers that are odd:

- 3,780 6,823 7,218 1,684 6,525

Please finish:

948, 928, 908, _____, _____, _____, _____, _____, _____, _____, _____

Solve:

$$\begin{array}{r} \$ 854.86 \\ + 289.18 \\ \hline \end{array}$$

$$\begin{array}{r} 4,802 \\ - 2,683 \\ \hline \end{array}$$

$$\begin{array}{r} 128 \\ \times 9 \\ \hline \end{array}$$

$$\frac{68}{8} = \underline{\quad}$$

Name: _____

Score: _____

Homework Math

Today is: _____

How much?

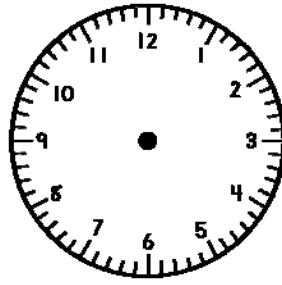
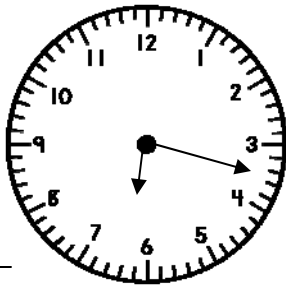


Write the number that is ten more than 3,382.

What is the time?

Show 12:43

- It is evening.



Round to nearest hundred.

5,782 _____

Please order these numbers from least to greatest:

5,283	4,974	4,656	5,020	5,122
-------	-------	-------	-------	-------

Please mark all numbers that are even:

- 5,721
 2,924
 6,863
 9,500
 3,718

Please finish:

682, 689, 696, _____, _____, _____, _____, _____, _____, _____

Solve:

$$\begin{array}{r} \$ 573.25 \\ + 484.98 \\ \hline \end{array}$$

$$\begin{array}{r} 8,200 \\ - 5,157 \\ \hline \end{array}$$

$$\begin{array}{r} 231 \\ \times 6 \\ \hline \end{array}$$

$$\frac{77}{6} = \underline{\hspace{2cm}}$$