

Name: \_\_\_\_\_

Score: \_\_\_\_\_

### Morning Math

Today is: \_\_\_\_\_

How much?



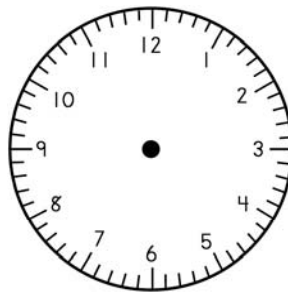
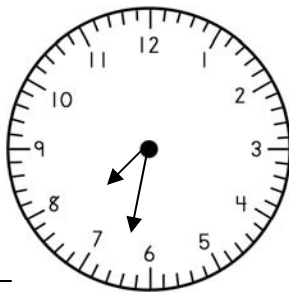
Write the number that is ten more than 95.

\_\_\_\_\_

What is the time?

Show 3:45

- It is morning.



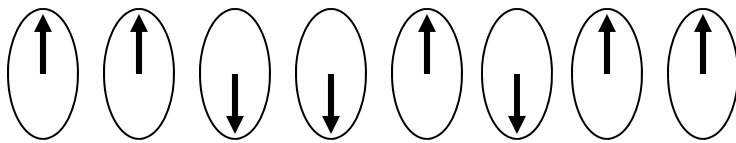
Round to nearest ten.

62 \_\_\_\_\_

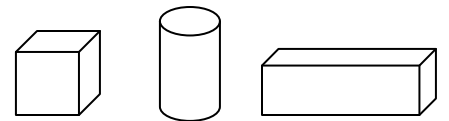
Please order these numbers from least to greatest:

753    709    745    712

- What comes next?



Circle the cylinder:



Please finish:

98, 88, 78, \_\_\_\_\_, \_\_\_\_\_, \_\_\_\_\_, \_\_\_\_\_, \_\_\_\_\_, \_\_\_\_\_

Solve:

$$\begin{array}{r} \$14.86 \\ + 24.13 \\ \hline \end{array}$$

$$\begin{array}{r} 38 \\ + 67 \\ \hline \end{array}$$

$$\begin{array}{r} 63 \\ - 21 \\ \hline \end{array}$$

$$\begin{array}{r} 886 \\ - 671 \\ \hline \end{array}$$

Name: \_\_\_\_\_

Score: \_\_\_\_\_

### Homework Math

Today is: \_\_\_\_\_

How much?

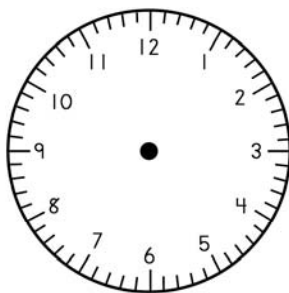
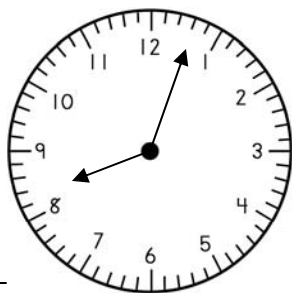


Write the number that is ten more than 185.

What is the time?

Show quarter of seven.

- It is night.



Round to nearest ten.

525 \_\_\_\_\_

Daryl had \$26.33. He earned \$12.25 cutting lawns. How much money does Daryl have in all? Please write and solve the problem.

Daryl has \_\_\_\_\_ in all.

Please order these numbers from least to greatest:

|     |     |     |     |
|-----|-----|-----|-----|
| 659 | 632 | 618 | 620 |
|-----|-----|-----|-----|

Please finish:

58, 62, 66, \_\_\_\_\_, \_\_\_\_\_, \_\_\_\_\_, \_\_\_\_\_, \_\_\_\_\_, \_\_\_\_\_, \_\_\_\_\_

Solve:

$$\begin{array}{r} \$25.62 \\ + 20.25 \\ \hline \end{array}$$

$$\begin{array}{r} 356 \\ + 420 \\ \hline \end{array}$$

$$\begin{array}{r} 45 \\ - 13 \\ \hline \end{array}$$

$$\begin{array}{r} 683 \\ - 453 \\ \hline \end{array}$$

Name: \_\_\_\_\_

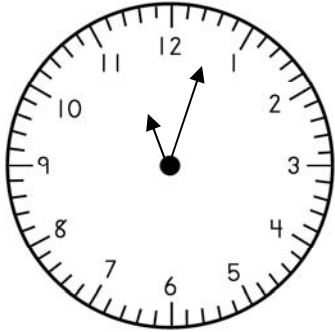
Score: \_\_\_\_\_

### Morning Math

Today is: \_\_\_\_\_

How much?

\_\_\_\_\_



What is the time?

\_\_\_\_\_

Please solve:

$$15 - N = 9$$

$$N = \underline{\hspace{2cm}}$$

Circle the odd numbers:

733

408

961

877

654

Jeremy walked 5 miles on Monday, 6 miles on Tuesday, and 7 miles on Wednesday. How many miles did Jeremy walk altogether? Please show your work.

Jeremy walked \_\_\_\_\_ miles.

Round to the nearest ten:

63 \_\_\_\_\_

74 \_\_\_\_\_

Which is the greatest number?

1,703

1,398

1,741

$$\begin{array}{r} 564 \\ + 231 \\ \hline \end{array}$$

$$\begin{array}{r} 476 \\ + 412 \\ \hline \end{array}$$

$$\begin{array}{r} 78 \\ - 22 \\ \hline \end{array}$$

$$\begin{array}{r} 750 \\ - 230 \\ \hline \end{array}$$

Name: \_\_\_\_\_

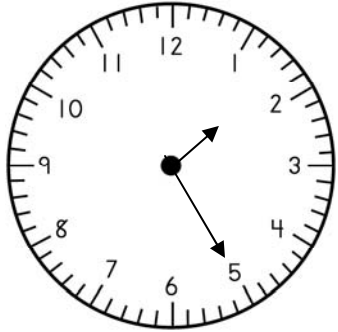
Score: \_\_\_\_\_

### Homework Math

Today is: \_\_\_\_\_

How much?

\_\_\_\_\_



What is the time?

\_\_\_\_\_

Please solve:

$$15 - N = 9$$

$$N = \underline{\hspace{2cm}}$$

Circle the odd numbers:

733

408

961

877

654

Anna Maria has \$13.35. She earned \$6.20 babysitting. How much money does she have in all? Please show your work.

She has \_\_\_\_\_ in all.

Round to the nearest ten:

53 \_\_\_\_\_

38 \_\_\_\_\_

Which is the least number?

1,447

1,747

1,774

$$\begin{array}{r} 238 \\ + 241 \\ \hline \end{array}$$

$$\begin{array}{r} 522 \\ + 137 \\ \hline \end{array}$$

$$\begin{array}{r} 61 \\ - 10 \\ \hline \end{array}$$

$$\begin{array}{r} 653 \\ - 141 \\ \hline \end{array}$$

Name: \_\_\_\_\_

Score: \_\_\_\_\_

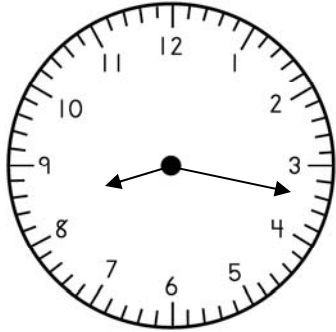
### Morning Math

Today is: \_\_\_\_\_

How much?



\_\_\_\_\_



What is the time?

\_\_\_\_\_

Please solve:

$17 - N = 8$

$N = \underline{\hspace{2cm}}$

Circle the even numbers:

610

336

211

457

188

Jorge rode his bike 3 miles the first day, 11 miles the second day, and 5 miles the third day. How many total miles did Jorge ride his bike? Please show your work.

Jorge rode \_\_\_\_\_ total miles.

Round to the nearest ten:

48 \_\_\_\_\_

72 \_\_\_\_\_

Write the hundreds number on the line.

4,285 \_\_\_\_\_

$$\begin{array}{r} 862 \\ + 25 \\ \hline \end{array}$$

$$\begin{array}{r} 331 \\ + 246 \\ \hline \end{array}$$

$$\begin{array}{r} 85 \\ - 43 \\ \hline \end{array}$$

$$\begin{array}{r} 657 \\ - 255 \\ \hline \end{array}$$

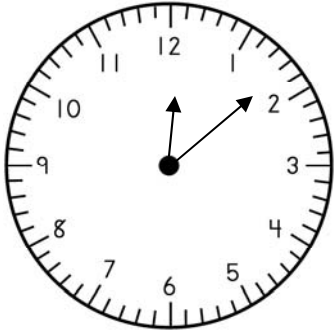
Name: \_\_\_\_\_

Score: \_\_\_\_\_

Homework Math

Today is: \_\_\_\_\_

How much?



What is the time?

\_\_\_\_\_

Please solve:

$16 - N = 8$

$N = \underline{\hspace{2cm}}$

Circle the odd numbers:

661

468

213

122

634

Rosa planted 11 rose bushes in the first row, 11 in the second row, and 6 in the third row of her garden. How many rose bushes did Rosa plant in all? Please show your work.

Rosa planted \_\_\_\_\_ rose bushes.

Round to the nearest ten:

64 \_\_\_\_\_

75 \_\_\_\_\_

Write the tens number on the line.

8,074 \_\_\_\_\_

$$\begin{array}{r} 483 \\ + 332 \\ \hline \end{array}$$

$$\begin{array}{r} 232 \\ + 456 \\ \hline \end{array}$$

$$\begin{array}{r} 77 \\ - 24 \\ \hline \end{array}$$

$$\begin{array}{r} 559 \\ - 414 \\ \hline \end{array}$$

Name: \_\_\_\_\_

Score: \_\_\_\_\_

### Morning Math

Today is: \_\_\_\_\_

How much?

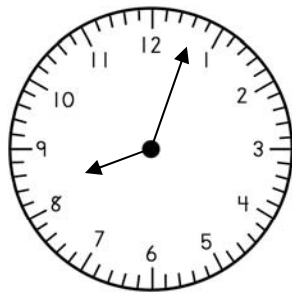


Write eighty-two in digits:

\_\_\_\_\_

What is the time?

- It is night.



Write 53 in words:

\_\_\_\_\_

Is 891 odd or even?

\_\_\_\_\_

What is ten less than 75?

\_\_\_\_\_

How much?

6 dimes and 3 nickels? \_\_\_\_\_

Jessie is ninth in line. Mark is 12th in line. How many people are between Jessie and Mark? \_\_\_\_\_

Please order these numbers from least to greatest:

|     |     |     |     |
|-----|-----|-----|-----|
| 907 | 884 | 914 | 855 |
|-----|-----|-----|-----|

\_\_\_\_\_

Please finish:

3, 6, 9, \_\_\_\_\_, \_\_\_\_\_, \_\_\_\_\_, \_\_\_\_\_, \_\_\_\_\_, \_\_\_\_\_, \_\_\_\_\_

Solve:

$$\begin{array}{r} \$ 35.28 \\ + 24.41 \\ \hline \end{array}$$

$$\begin{array}{r} 502 \\ + 367 \\ \hline \end{array}$$

$$\begin{array}{r} 72 \\ - 41 \\ \hline \end{array}$$

$$\begin{array}{r} 445 \\ - 202 \\ \hline \end{array}$$

Name: \_\_\_\_\_

Score: \_\_\_\_\_

### Homework Math

Today is: \_\_\_\_\_

How much?

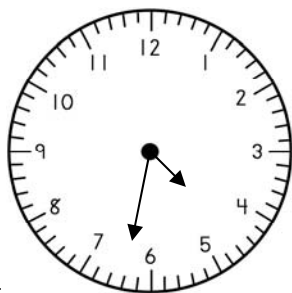


Write fifty-three in digits:

\_\_\_\_\_

What is the time?

- It is afternoon.



Write 62 in words:

\_\_\_\_\_

Is 635 odd or even?

\_\_\_\_\_

What is ten more than 89?

\_\_\_\_\_

How much?

7 dimes and 6 nickels? \_\_\_\_\_

How many days are in three weeks? \_\_\_\_\_

Please order these numbers from least to greatest:

|     |     |     |     |
|-----|-----|-----|-----|
| 783 | 706 | 713 | 765 |
|-----|-----|-----|-----|

\_\_\_\_\_

Please finish:

16, 20, 24, \_\_\_\_\_, \_\_\_\_\_, \_\_\_\_\_, \_\_\_\_\_, \_\_\_\_\_, \_\_\_\_\_, \_\_\_\_\_

Solve:

$$\begin{array}{r} \$31.54 \\ + 24.43 \\ \hline \end{array}$$

$$\begin{array}{r} 364 \\ + 223 \\ \hline \end{array}$$

$$\begin{array}{r} 57 \\ - 31 \\ \hline \end{array}$$

$$\begin{array}{r} 768 \\ - 236 \\ \hline \end{array}$$





Name: \_\_\_\_\_

Score: \_\_\_\_\_

### Homework Math

Today is: \_\_\_\_\_

How much?



What is the fourth month of the year?

\_\_\_\_\_

Please solve:

$13 - X = 6$

$X = \underline{\hspace{2cm}}$

Write forty-eight.

\_\_\_\_\_

Use > or <:

$446 \bigcirc 512$

$319 \bigcirc 325$

Use the graph to answer the questions:

|         |   |   |   |   |   |   |   |   |   |   |   |   |   |
|---------|---|---|---|---|---|---|---|---|---|---|---|---|---|
| grapes  | ■ | ■ | ■ | ■ | ■ | ■ | ■ | ■ | ■ | ■ | ■ | ■ | ■ |
| oranges | ■ | ■ | ■ | ■ | ■ | ■ | ■ | ■ | ■ | ■ | ■ | ■ | ■ |
| peaches | ■ | ■ | ■ | ■ | ■ | ■ | ■ | ■ | ■ | ■ | ■ | ■ | ■ |
| plums   | ■ | ■ | ■ | ■ | ■ | ■ | ■ | ■ | ■ | ■ | ■ | ■ | ■ |

Write a title for the graph: \_\_\_\_\_

How many students like peaches? \_\_\_\_\_

How many students like grapes? \_\_\_\_\_

How many students like plums? \_\_\_\_\_

How many more students like grapes than oranges? \_\_\_\_\_

$$\begin{array}{r} 248 \\ + 411 \\ \hline \end{array}$$

$$\begin{array}{r} 336 \\ + 213 \\ \hline \end{array}$$

$$\begin{array}{r} 76 \\ - 23 \\ \hline \end{array}$$

$$\begin{array}{r} 664 \\ - 132 \\ \hline \end{array}$$