

Name: _____

Score: _____

Morning Math

Today is: _____

How much?



50 ¢

• Circle the pairs of socks.

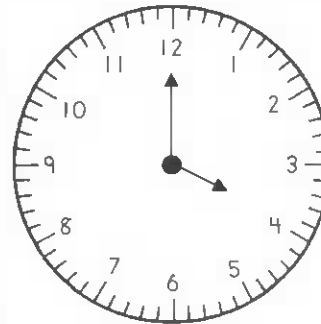


How many socks are in one pair? 2

How many pairs of socks are there? 7

Circle the greatest number:

19 17 23
24 26 20



What time is it?

4:00

$$\begin{array}{r} 6 \\ + 3 \\ \hline 9 \end{array}$$

$$\begin{array}{r} 4 \\ + 2 \\ \hline 6 \end{array}$$

$$\begin{array}{r} 7 \\ - 2 \\ \hline 5 \end{array}$$

$$\begin{array}{r} 5 \\ - 2 \\ \hline 3 \end{array}$$

• Write the numbers from 1 to 10.

• Color the number that comes after 8 blue.



Name: _____

Score: _____

Homework Math

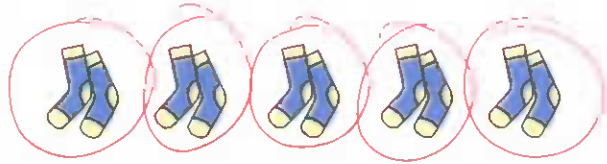
Today is: _____

How much?



40¢

• Circle the pairs of socks.

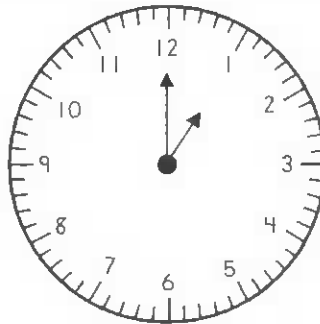


How many socks are in one pair? 2

How many pairs of socks are there? 5

Circle the greatest number:

21 17 25
23 22
 13



What time is it?

1:00

$$\begin{array}{r} 8 \\ + 1 \\ \hline 9 \end{array}$$

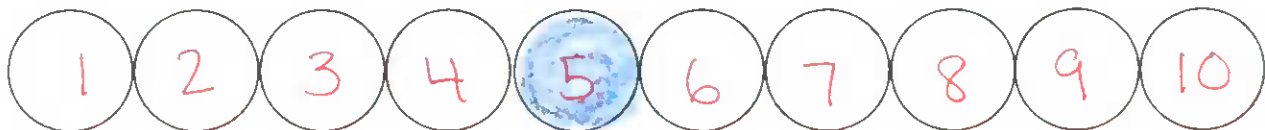
$$\begin{array}{r} 5 \\ + 2 \\ \hline 7 \end{array}$$

$$\begin{array}{r} 8 \\ - 4 \\ \hline 4 \end{array}$$

$$\begin{array}{r} 6 \\ - 1 \\ \hline 5 \end{array}$$

• Write the numbers from 1 to 10.

• Color the number that comes before 6 blue.




Name: _____

Score: _____

Morning Math

Today is: _____

How much?



70 ¢

• Circle the pairs of shoes.

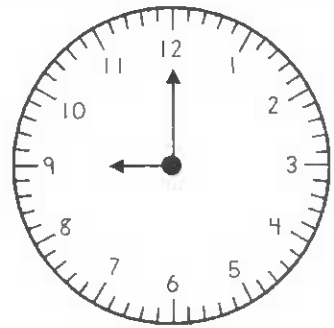


How many pairs of shoes are there? 7

How many shoes in all? 14

Circle the least number:

32 26 20
30 25 28



What time is it?

9:00

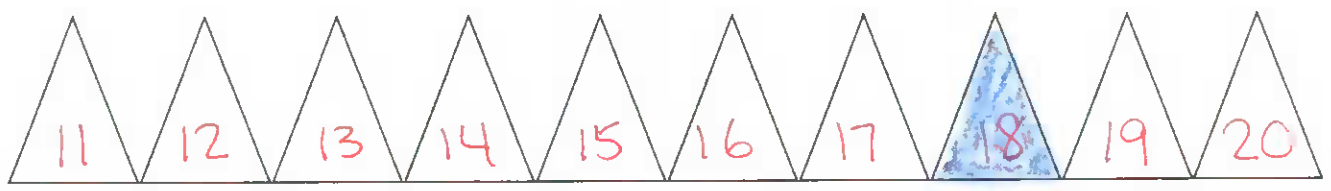
$$\begin{array}{r} 5 \\ + 4 \\ \hline 9 \end{array}$$

$$\begin{array}{r} 4 \\ + 4 \\ \hline 8 \end{array}$$

$$\begin{array}{r} 8 \\ - 6 \\ \hline 2 \end{array}$$

$$\begin{array}{r} 4 \\ - 1 \\ \hline 3 \end{array}$$

• Write the numbers from 11 to 20. Color the number that comes between 17 and 19 blue.




Name: _____

Score: _____

Homework Math

Today is: _____

How much?



80 ¢

• Circle the pairs of shoes.



How many pairs of shoes are there? 5

How many shoes in all? 10

Circle the least number:

28

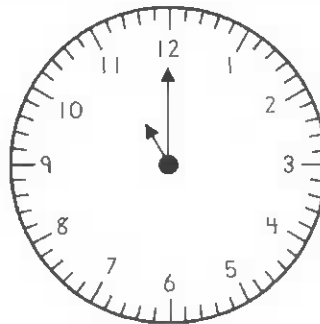
27

30

22

23

29



What time is it?

11:00

$$\begin{array}{r} 7 \\ + 2 \\ \hline 9 \end{array}$$

$$\begin{array}{r} 4 \\ + 3 \\ \hline 7 \end{array}$$

$$\begin{array}{r} 7 \\ - 5 \\ \hline 2 \end{array}$$

$$\begin{array}{r} 8 \\ - 2 \\ \hline 6 \end{array}$$

• Write the numbers from 11 to 20. Color the number that comes between 13 and 15 red.



Name: _____

Score: _____

Morning Math

Today is: _____

6 ducks are in the pond. 3 more ducks fly to the pond. How many ducks are in the pond in all? Please circle the clue words. Please write and solve this problem.

$$\begin{array}{r} 6 \\ + 3 \\ \hline 9 \end{array}$$

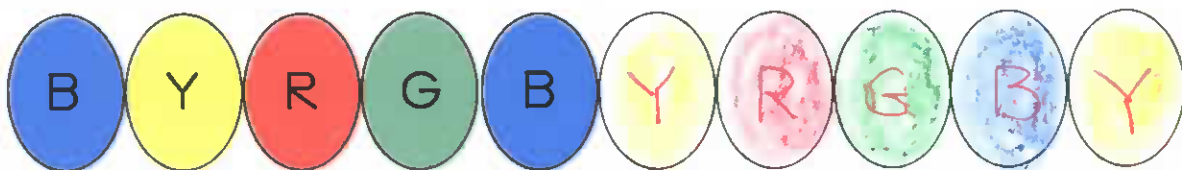
There are 9 ducks in the pond in all.

Please color to show:

- 7 kids like lemonade.
- 5 kids like cherry juice.
- 3 kids like grape juice.

lemonade							
cherry							
grape							

Please continue the pattern.



Please put these numbers in order from least to greatest.

29

33

22

26

22

26

29

33

$$\begin{array}{r} 3 \\ + 5 \\ \hline 8 \end{array}$$

$$\begin{array}{r} 4 \\ + 2 \\ \hline 6 \end{array}$$

$$\begin{array}{r} 6 \\ - 3 \\ \hline 3 \end{array}$$

$$\begin{array}{r} 7 \\ - 2 \\ \hline 5 \end{array}$$

Name: _____

Score: _____

Homework Math

Today is: _____

9 people are in line for a ride. 3 people get on the ride. How many people are left in line?

Please circle the clue words.




Please write and solve this problem.

$$\begin{array}{r} 9 \\ - 3 \\ \hline 6 \end{array}$$

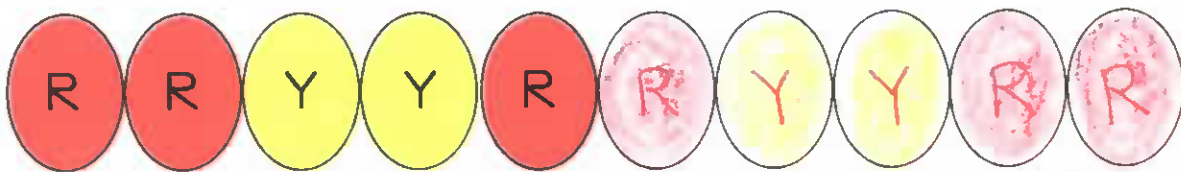
There are 6 people left in line.

Please color to show:

- 2 kids like cranberry juice.
- 7 kids like apple juice.
- 5 kids like orange.

cranberry							
apple							
orange							

Please continue the pattern.



Please put these numbers in order from least to greatest.

20

24

34

29

20

24

29

34

$$\begin{array}{r} 5 \\ + 5 \\ \hline 10 \end{array}$$

$$\begin{array}{r} 3 \\ + 2 \\ \hline 5 \end{array}$$

$$\begin{array}{r} 5 \\ - 4 \\ \hline 1 \end{array}$$

$$\begin{array}{r} 7 \\ - 3 \\ \hline 4 \end{array}$$

Name: _____

Score: _____

Morning Math

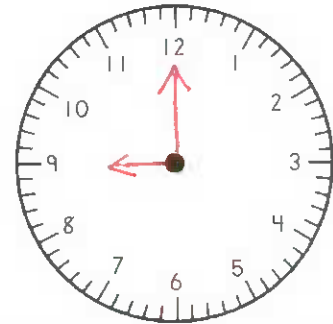
Today is: _____



How much?

80¢

Draw the hands to show 9:00.



Use only 2 of the digit cards to write the largest **two digit** number you can make.



63

Write the numbers your teacher reads to you:

(varied)

A: _____ B: _____

$$\begin{array}{r} 8 \\ + 2 \\ \hline 10 \end{array}$$

$$\begin{array}{r} 6 \\ + 1 \\ \hline 7 \end{array}$$

$$\begin{array}{r} 4 \\ - 3 \\ \hline 1 \end{array}$$

$$\begin{array}{r} 8 \\ - 5 \\ \hline 3 \end{array}$$

Please finish:

18, 19, 20, 21, 22

What comes next?



Name: _____

Score: _____

Homework Math

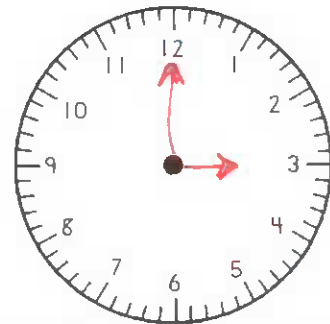
Today is: _____



How much?

60¢

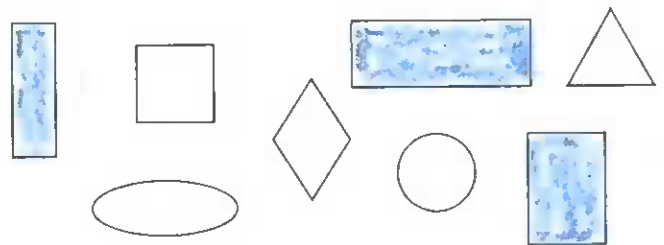
Draw the hands to show 3:00.



Use only 2 of the digit cards to write the largest **two digit** number you can make.

2 1 4 42

Color the rectangles blue.



$$\begin{array}{r} 4 \\ + 4 \\ \hline 8 \end{array}$$

$$\begin{array}{r} 6 \\ + 5 \\ \hline 11 \end{array}$$

$$\begin{array}{r} 5 \\ - 2 \\ \hline 3 \end{array}$$

$$\begin{array}{r} 7 \\ - 6 \\ \hline 1 \end{array}$$

Please finish:

23, 24, 25, 26, 27

What comes next?



Name: _____

Score: _____

Morning Math

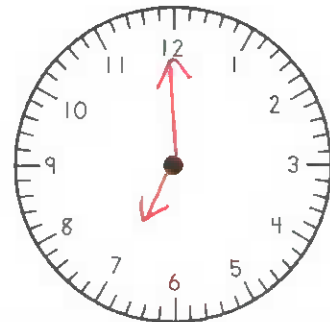
Today is: _____



How much?

30¢

Draw the hands to show 7:00



$$\begin{array}{r} 6 \\ + 1 \\ \hline 7 \end{array}$$

Write 2 different addition problems that equal 7.

(varied)

+ _____

+ _____

$$\begin{array}{r} 8 \\ + 1 \\ \hline 9 \end{array}$$

$$\begin{array}{r} 4 \\ + 2 \\ \hline 6 \end{array}$$

$$\begin{array}{r} 8 \\ - 4 \\ \hline 4 \end{array}$$

$$\begin{array}{r} 6 \\ - 1 \\ \hline 5 \end{array}$$

- Write the numbers from 21 to 30.
- Color the even numbers green.

21	22	23	24	25	26	27	28	29	30
----	----	----	----	----	----	----	----	----	----

Name: _____

Score: _____

Homework Math

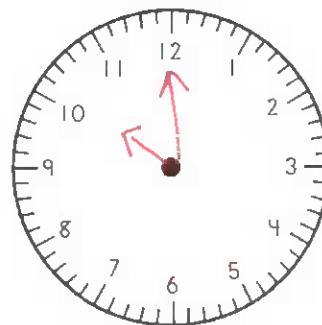
Today is: _____



How much?

20 ¢

Draw the hands to show 10:00



$$\begin{array}{r} 7 \\ + 1 \\ \hline 8 \end{array}$$

Write 2 different addition problems that equal 8.

(varied)

+ _____

+ _____

$$\begin{array}{r} 3 \\ + 3 \\ \hline 6 \end{array}$$

$$\begin{array}{r} 4 \\ + 5 \\ \hline 9 \end{array}$$

$$\begin{array}{r} 8 \\ - 3 \\ \hline 5 \end{array}$$

$$\begin{array}{r} 4 \\ - 2 \\ \hline 2 \end{array}$$

- Write the numbers from 21 to 30.
- Color the odd numbers yellow.

21	22	23	24	25	26	27	28	29	30
----	----	----	----	----	----	----	----	----	----