

Name: _____

Score: _____

Morning Math

Today is: _____

Continue counting. Color the number that is 2 less than 77 green.

73	74								
----	----	--	--	--	--	--	--	--	--

- Circle groups of ten. How many?
- How many ones?

Tens: _____

Ones: _____

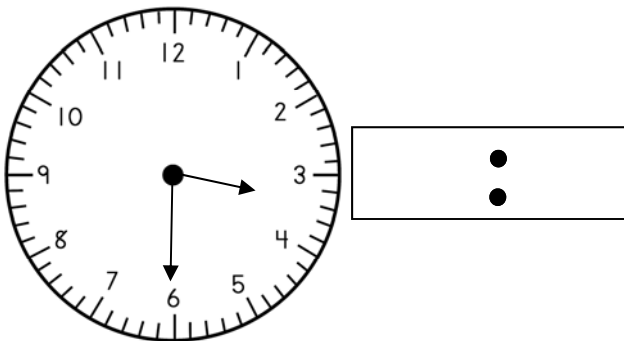
Find the missing number.

$$\square - 9 = 3$$

Find the missing number.

$$\square + 4 = 12$$

What is the time?



$$\begin{array}{r} 7 \\ + 7 \\ \hline \end{array} \quad \begin{array}{r} 8 \\ + 5 \\ \hline \end{array} \quad \begin{array}{r} 50 \\ + 10 \\ \hline \end{array}$$

$$\begin{array}{r} 13 \\ - 7 \\ \hline \end{array} \quad \begin{array}{r} 8 \\ - 5 \\ \hline \end{array} \quad \begin{array}{r} 9 \\ - 7 \\ \hline \end{array}$$

Name: _____

Score: _____

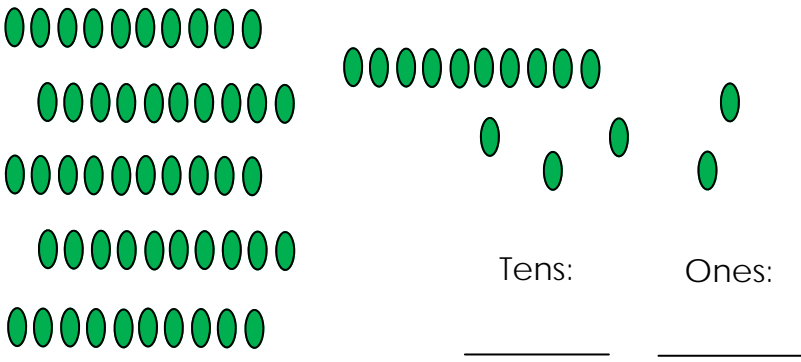
Math Homework

Today is: _____

Continue counting. Color the number that is 2 more than 85 green.

79	80								
----	----	--	--	--	--	--	--	--	--

- Circle groups of ten. How many?
- How many ones?



Tens: _____

Ones: _____

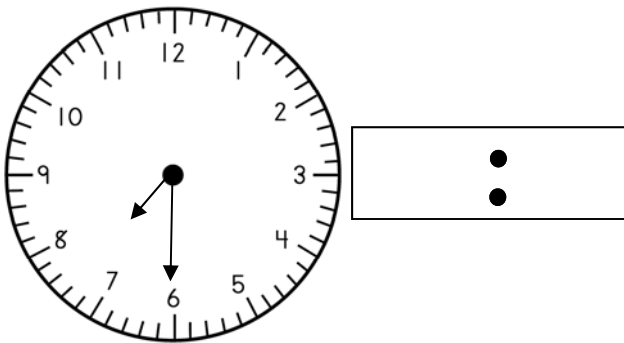
Find the missing number.

$$8 - \square = 3$$

Find the missing number.

$$7 + \square = 13$$

What is the time?



$$\begin{array}{r} 8 \\ + 5 \\ \hline \end{array}$$

$$\begin{array}{r} 6 \\ + 6 \\ \hline \end{array}$$

$$\begin{array}{r} 20 \\ + 10 \\ \hline \end{array}$$

$$\begin{array}{r} 12 \\ - 6 \\ \hline \end{array}$$

$$\begin{array}{r} 9 \\ - 4 \\ \hline \end{array}$$

$$\begin{array}{r} 4 \\ - 3 \\ \hline \end{array}$$