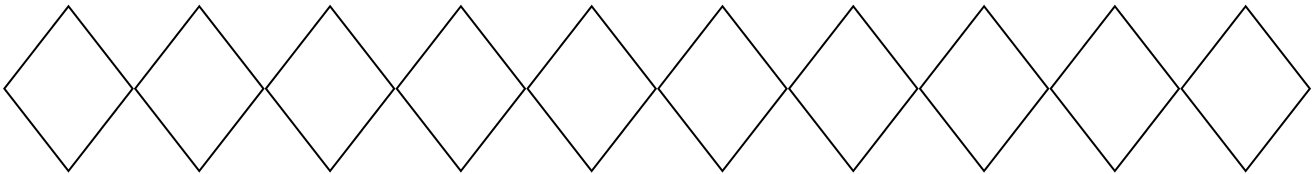


Name: _____

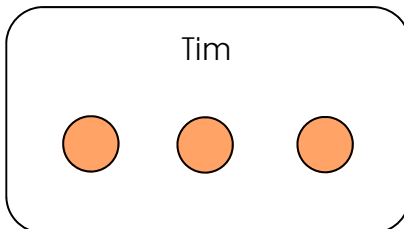
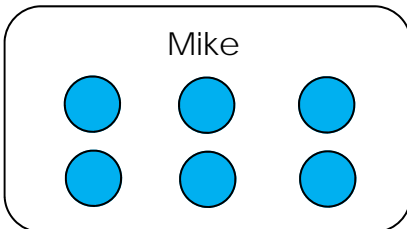
Score: _____

Morning Math

Write the numbers from 31 to 40. Color the number that is one less than 33 blue.



- Mike has 6 balls.
- Tim has 3 balls.



How **many more** balls does Mike have than Tim?

Use > or <

$$5 \bigcirc 3$$

Write the number that comes before.

_____, 21

Cross out 6 butterflies.



How many butterflies are left?

$$\begin{array}{r} 10 \\ - 6 \\ \hline \end{array}$$

$$\begin{array}{r} 5 \\ + 5 \\ \hline \end{array}$$

$$\begin{array}{r} 6 \\ + 3 \\ \hline \end{array}$$

$$6 - 3 = \underline{\quad}$$

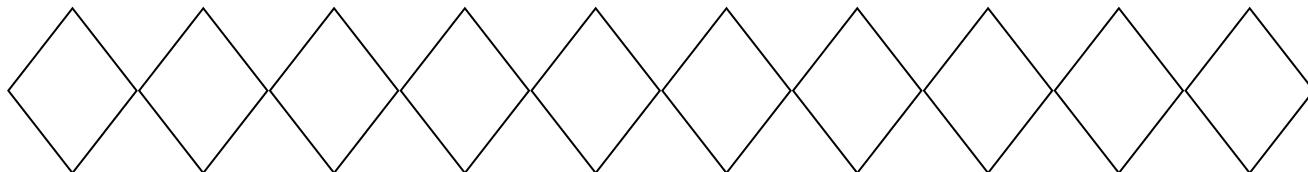
$$6 - 2 = \underline{\quad}$$

Name: _____

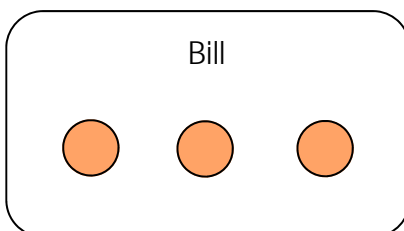
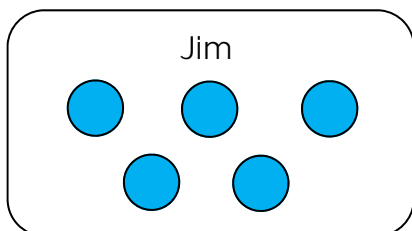
Score: _____

Math Homework

Write the numbers from 31 to 40. Color the number that is one more than 36 blue.



- Jim has 5 balls.
- Bill has 3 balls.



How **many more** balls does Jim have than Bill?


Use > or <

2 ○ 0

Write the number that comes before.

_____, 28

Cross out 4 butterflies.



How many butterflies are left?

$$\begin{array}{r} 10 \\ - 4 \\ \hline \end{array}$$

$$\begin{array}{r} 6 \\ + 2 \\ \hline \end{array} \quad \begin{array}{r} 7 \\ + 3 \\ \hline \end{array}$$

$$6 - 0 = \underline{\quad}$$

$$6 - 4 = \underline{\quad}$$